
























サイコロ裏目計算 たし算・ひき算7

★サイコロは表側と裏側の目を足すと合計で「7」になります。それぞれのサイコロの裏目を考えながら計算をしてください。

例)

裏目

$$1 + 5 - 2 = 4$$

- ①  +  -  = 
- ②  +  -  = 
- ③  +  -  = 
- ④  +  -  = 
- ⑤  +  -  = 
- ⑥  +  -  = 