






























サイコロ裏目計算 四則演算 5

★サイコロは表側と裏側の目を足すと「7」になります。それぞれのサイコロの裏目を考えながら計算をしてください。

例)

$$\begin{array}{c} \text{裏目} \end{array} \begin{array}{c} \text{5} \end{array} \div \begin{array}{c} \text{1} \end{array} = \begin{array}{c} \text{5} \end{array}$$

①		+		=	
②		×		=	
③		÷		=	
④		-		=	
⑤		+		=	
⑥		×		=	
⑦		÷		=	
⑧		-		=	
⑨		+		=	
⑩		×		=	